



بِسْمِ اللّٰهِ الرَّحْمٰنِ الرَّحِیْمِ




Prepared by Umm Abdis Salaam Al Grenaadiyyah





---






## Addition





Directions- Add the shapes and then draw the amount of shapes that equals the answer.

1.  +  =

2.   +  =

3.    +  =

4.     +  =

5.    +  =

6.   +    =

**Directions- Write the correct answer.**

1)  $1 + 1 = \underline{\quad}$

2)  $2 + 2 = \underline{\quad}$

3)  $1 + 3 = \underline{\quad}$

4)  $2 + 3 = \underline{\quad}$

5)  $1 + 2 = \underline{\quad}$

**Directions- Write the correct answer and color the squares.**

1)      +   =       

2)    +   =       

3)    +    =       

4)      +    =       

5)     +    =

**Directions- Write the correct answer.**

6)  $2 + 6 = \underline{\quad}$

7)  $3 + 5 = \underline{\quad}$

8)  $4 + 1 = \underline{\quad}$

9)  $3 + 4 = \underline{\quad}$

10)  $3 + 3 = \underline{\quad}$

**Directions- Draw circles to equal the number given.**

1) 6

2) 4



3) 8


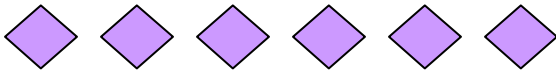
4) 7



5) 9

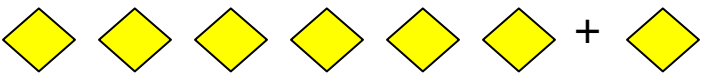
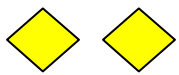
**Directions- Write the correct answer.**

1)  +  =         

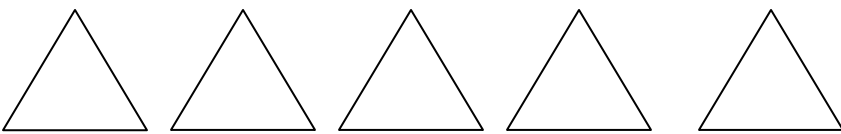
2)  +  =

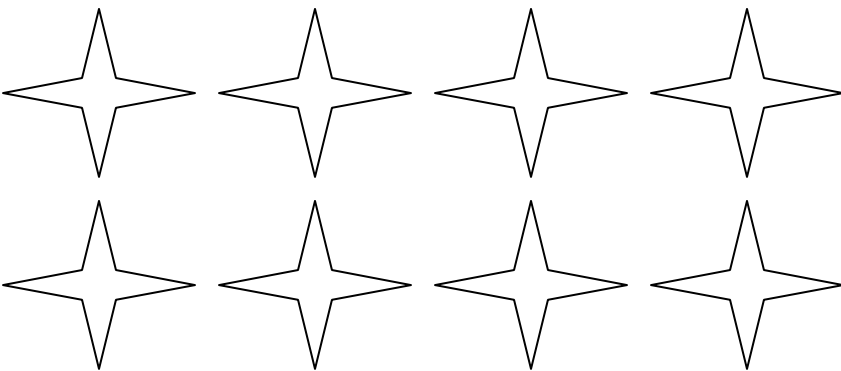
3)  +  = \_\_\_\_\_

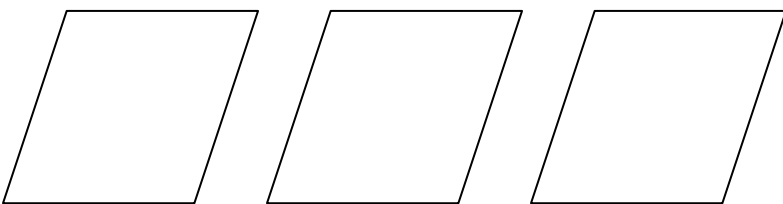
4)  +  = \_\_\_\_\_

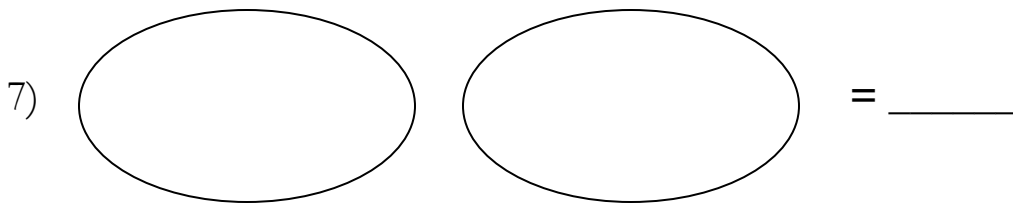

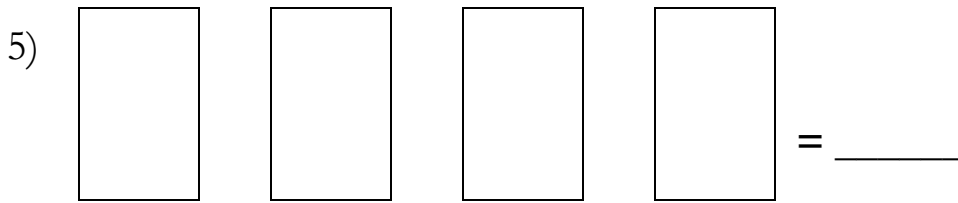
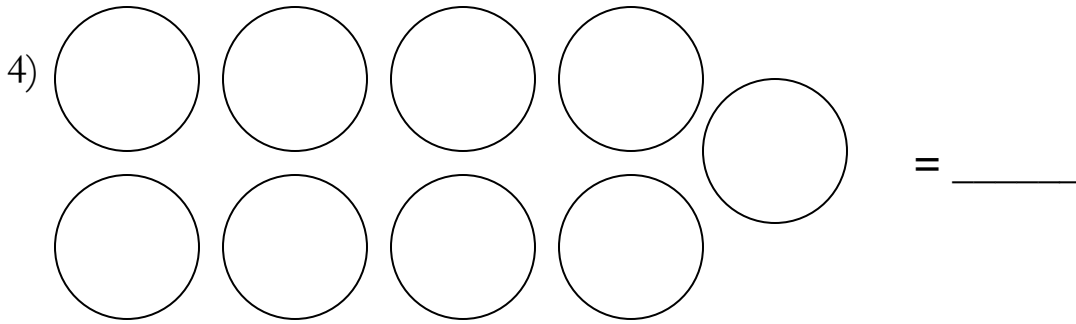
5)  +  = \_\_\_\_\_


**Directions-** Write the correct number next to the shapes and then color the shapes.


1)  = \_\_\_\_\_


2)  = \_\_\_\_\_

3)  = \_\_\_\_\_



8)  = \_\_\_\_\_

9)  = \_\_\_\_\_

10)  = \_\_\_\_\_